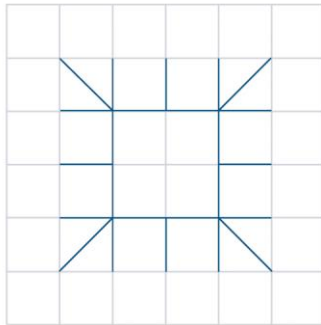



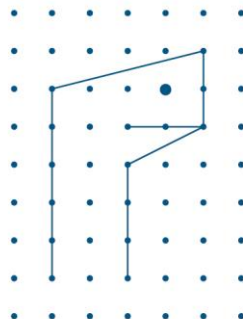

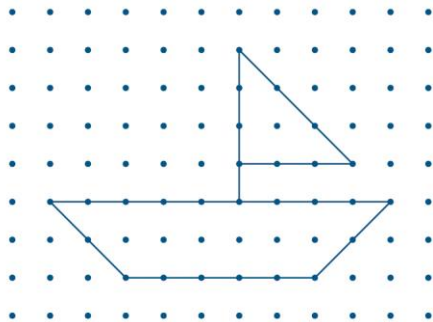
Prénom : Date :

Reproduire des figures à partir d'un modèle

1. Reproduis la figure.



2. Reproduis les figures.

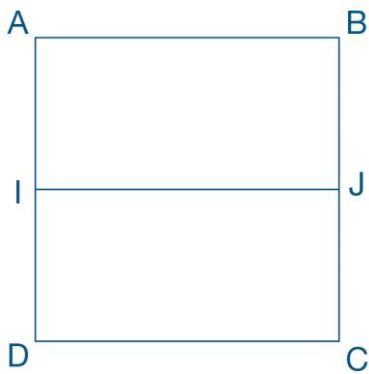


3. Poursuis la frise.



4. Reproduis la figure en t'aidant des indications.

$ABCD$ est un carré de 4 cm de côté. I est le milieu de $[AD]$ et J le milieu de $[BC]$.



5. Reproduis la figure.

